
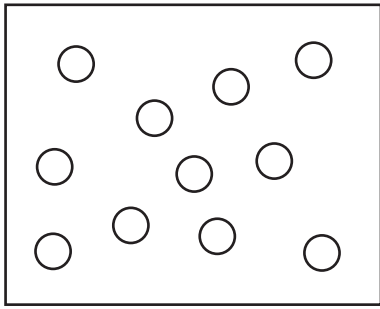
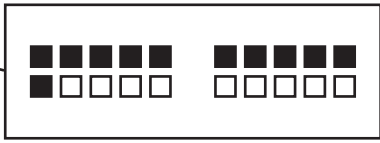
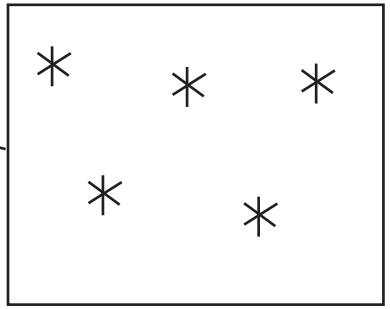

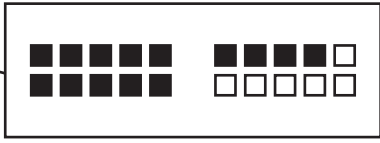

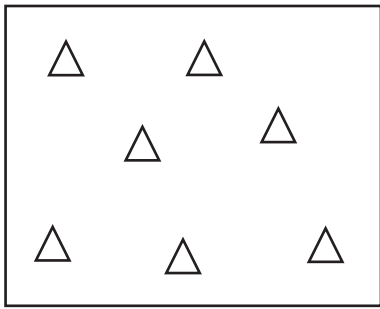
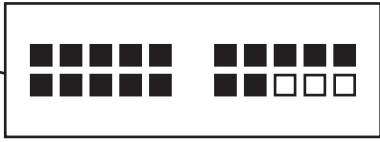
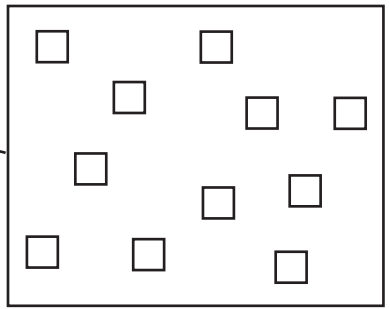
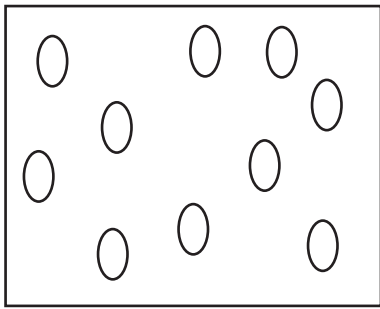
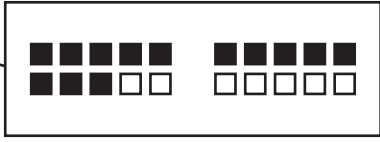






Wie viele sind es?



Datum: _____

 Male die richtige Anzahl von Symbolen passend zur angegebenen Menge im Zwanzigerfeld.

Mengen vergleichen









Datum: _____







Vergleiche und  trage ein: $<$ $>$ $=$.





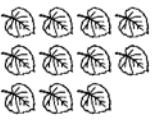

„... ist größer als ...“ $>$







„... ist kleiner als ...“ $<$

„... ist gleich ...“ $=$

 	 	 
<div style="border: 1px solid black; padding: 5px; display: inline-block; margin-right: 10px;">19</div> <div style="border: 1px solid black; padding: 5px; display: inline-block; margin-right: 10px;">></div> <div style="border: 1px solid black; padding: 5px; display: inline-block;">10</div>	<div style="border: 1px solid black; padding: 5px; display: inline-block; margin-right: 10px;"> </div> <div style="border: 1px solid black; padding: 5px; display: inline-block; margin-right: 10px;"><</div> <div style="border: 1px solid black; padding: 5px; display: inline-block;"> </div>	<div style="border: 1px solid black; padding: 5px; display: inline-block; margin-right: 10px;"> </div> <div style="border: 1px solid black; padding: 5px; display: inline-block; margin-right: 10px;">=</div> <div style="border: 1px solid black; padding: 5px; display: inline-block;"> </div>

 	 	 
<div style="border: 1px solid black; padding: 5px; display: inline-block; margin-right: 10px;"> </div> <div style="border: 1px solid black; padding: 5px; display: inline-block; margin-right: 10px;"> </div> <div style="border: 1px solid black; padding: 5px; display: inline-block;"> </div>	<div style="border: 1px solid black; padding: 5px; display: inline-block; margin-right: 10px;"> </div> <div style="border: 1px solid black; padding: 5px; display: inline-block; margin-right: 10px;"> </div> <div style="border: 1px solid black; padding: 5px; display: inline-block;"> </div>	<div style="border: 1px solid black; padding: 5px; display: inline-block; margin-right: 10px;"> </div> <div style="border: 1px solid black; padding: 5px; display: inline-block; margin-right: 10px;"> </div> <div style="border: 1px solid black; padding: 5px; display: inline-block;"> </div>

 	 	 
<div style="border: 1px solid black; padding: 5px; display: inline-block; margin-right: 10px;"> </div> <div style="border: 1px solid black; padding: 5px; display: inline-block; margin-right: 10px;"> </div> <div style="border: 1px solid black; padding: 5px; display: inline-block;"> </div>	<div style="border: 1px solid black; padding: 5px; display: inline-block; margin-right: 10px;"> </div> <div style="border: 1px solid black; padding: 5px; display: inline-block; margin-right: 10px;"> </div> <div style="border: 1px solid black; padding: 5px; display: inline-block;"> </div>	<div style="border: 1px solid black; padding: 5px; display: inline-block; margin-right: 10px;"> </div> <div style="border: 1px solid black; padding: 5px; display: inline-block; margin-right: 10px;"> </div> <div style="border: 1px solid black; padding: 5px; display: inline-block;"> </div>

 	 	 
<div style="border: 1px solid black; padding: 5px; display: inline-block; margin-right: 10px;"> </div> <div style="border: 1px solid black; padding: 5px; display: inline-block; margin-right: 10px;"> </div> <div style="border: 1px solid black; padding: 5px; display: inline-block;"> </div>	<div style="border: 1px solid black; padding: 5px; display: inline-block; margin-right: 10px;"> </div> <div style="border: 1px solid black; padding: 5px; display: inline-block; margin-right: 10px;"> </div> <div style="border: 1px solid black; padding: 5px; display: inline-block;"> </div>	<div style="border: 1px solid black; padding: 5px; display: inline-block; margin-right: 10px;"> </div> <div style="border: 1px solid black; padding: 5px; display: inline-block; margin-right: 10px;"> </div> <div style="border: 1px solid black; padding: 5px; display: inline-block;"> </div>

Aufgabenfamilien



Datum: _____

Ergänze die fehlenden Zahlen.

5 8 = -
13 +

8	+	5	=	
5	+	8	=	
13	-	5	=	
13	-	8	=	

3 9 = -
12 +

3	+	9	=	
9	+		=	12
12	-		=	9
12	-	9	=	

7 6 = -
13 +

7	+		=	13
6	+		=	13
	-	6	=	7
	-	7	=	6

4 8 = -
? +

4	+		=	
8	+		=	
	-	4	=	
	-	8	=	

7 ? = -
12 +

7	+		=	
	+	7	=	
12	-		=	
12	-		=	

3 8 = -
? +

3	+		=	
8	+		=	
	-	3	=	
	-	8	=	

Denke dir eigene Aufgabenfamilien aus.

= -
 17 +


<input type="text"/>	+	<input type="text"/>	=	<input type="text"/>
<input type="text"/>	+	<input type="text"/>	=	<input type="text"/>
<input type="text"/>	-	<input type="text"/>	=	<input type="text"/>
<input type="text"/>	-	<input type="text"/>	=	<input type="text"/>

= -
 +

<input type="text"/>	+	<input type="text"/>	=	<input type="text"/>
<input type="text"/>	+	<input type="text"/>	=	<input type="text"/>
<input type="text"/>	-	<input type="text"/>	=	<input type="text"/>
<input type="text"/>	-	<input type="text"/>	=	<input type="text"/>

= -
 +

<input type="text"/>	+	<input type="text"/>	=	<input type="text"/>
<input type="text"/>	+	<input type="text"/>	=	<input type="text"/>
<input type="text"/>	-	<input type="text"/>	=	<input type="text"/>
<input type="text"/>	-	<input type="text"/>	=	<input type="text"/>



Übungen zur Addition



Datum: _____

Rechne und  male die Kästchen aus.

□□□□□	□□□□□				
□□□□□	□□□□□				
8	+		=	1	2

□□□□□	□□□□□				
□□□□□	□□□□□				
3	+		=	1	1

□□□□□	□□□□□				
□□□□□	□□□□□				
5	+		=	1	4

□□□□□	□□□□□				
□□□□□	□□□□□				
	+	7	=	1	6

□□□□□	□□□□□				
□□□□□	□□□□□				
	+	6	=	1	5

□□□□□	□□□□□				
□□□□□	□□□□□				
	+	8	=	1	3

□□□□□	□□□□□				
□□□□□	□□□□□				
1	3	=	9	+	

□□□□□	□□□□□				
□□□□□	□□□□□				
1	7	=	8	+	

□□□□□	□□□□□				
□□□□□	□□□□□				
1	1	=	3	+	

□□□□□	□□□□□				
□□□□□	□□□□□				
1	4	=	8		

□□□□□	□□□□□				
□□□□□	□□□□□				
1	2	=	3	+	

□□□□□	□□□□□				
□□□□□	□□□□□				
1	5	=	9	+	

Rechne und  male aus.

11 rot

12 orange

14 grün

13 **15** **17** blau

