

# Let's sing a song: Ten little teddy bears

F

One lit - tle, two lit - tle three lit - tle ted - dy bears,


3 C7

four lit - tle, five lit - tle, six lit - tle ted - dy bears,

5 F C7 F


se-ven lit-tle, eight lit-tle, nine lit-tle ted-dy bears, ten ted-dies in my bed.


Text: Heidrun Rebenstorff  
Melodie nach: Ten little Indians




2. Ten little, nine little, eight little teddy bears,  
seven little, six little, five little teddy bears,  
four little, three little, two little teddy bears,  
one teddy in my bed.

 Draw lines.


 Verbinde Bild und passende Wortkarte.




three teddies



five teddies



nine teddies



track 5

# Spot the mistakes

 Find the wrong numbers.

 Cross them out.

one  
one  
on one won  
one  
ome  
one  
won  
one  
on  
one

two two two to  
two to two two  
two two two  
two two two tu

three three  
tree thri  
three  
tree  
three three thri  
tree three thri

fiwe five feif  
five  
fife feif five  
five feif five  
five feif  
five feif

six syx six six  
siks  
six six siks  
six six six  
six six six

four four  
for four  
four for  
four for  
vor four four for  
four  
vor

seven seven  
sevn seven  
seven seven  
seven seven

eight eight  
eit  
eight eight  
eight eight  
eit  
eight eight

nine nine  
nein nine  
nein nain  
nine nine  
nine nin  
nine nain  
nine nine  
nine nin  
nain

ten  
tem ten  
ten  
tin  
ten  
ten  
tem  
tin

ten ten  
tem  
ten tin  
ten  
ten  
ten  
tin tem  
ten ten



- 1
- 8
- 4
- 2
- 5
- 7
- 3
- 9
- 6
- 1
- 3
- 4
- 5
- 9
- 2
- 1

# Let's do sums – Let's do subtractions

**You need: / Du brauchst:**

a pencil

**This is how you do it: / So geht es:**

Do sums – do subtractions.  Write down.

Überlege dir Aufgaben und notiere sie.

Example: **Three plus three is six.**

Let's do sums:

\_\_\_\_\_ plus \_\_\_\_\_ is \_\_\_\_\_

\_\_\_\_\_ plus \_\_\_\_\_ is \_\_\_\_\_

\_\_\_\_\_ plus \_\_\_\_\_ is \_\_\_\_\_

\_\_\_\_\_ plus \_\_\_\_\_ is \_\_\_\_\_

Let's do subtractions:

\_\_\_\_\_ minus \_\_\_\_\_ is \_\_\_\_\_

\_\_\_\_\_ minus \_\_\_\_\_ is \_\_\_\_\_

\_\_\_\_\_ minus \_\_\_\_\_ is \_\_\_\_\_

\_\_\_\_\_ minus \_\_\_\_\_ is \_\_\_\_\_

3 + 3 = 6

