




Schau genau 1

Welche Puzzleteile passen? 



1



2



3



4



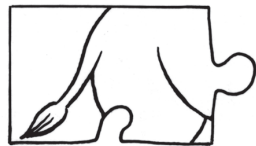
5



6



7

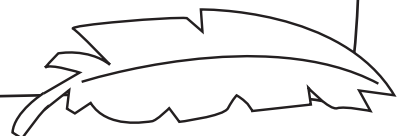



8



Schau genau 2

Zwei sind genau gleich. Welche? 



Geometrie 3

 **Verbinde den Text mit dem Bild.**

Ein Kreis in einem Rechteck.

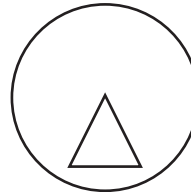
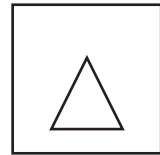
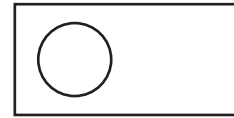
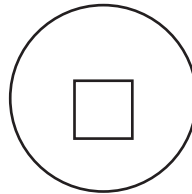
Ein Dreieck in einem Quadrat.

Über einem Dreieck ist ein Kreis.

Unter einem Dreieck ist ein Kreis.

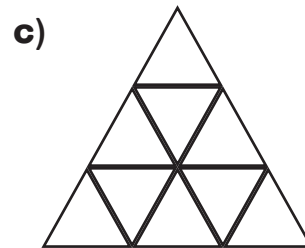
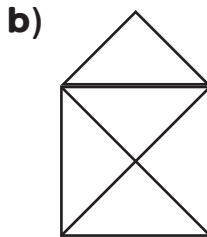
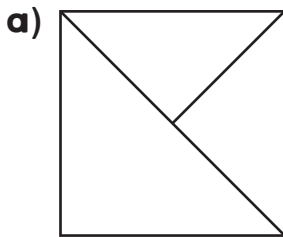
In einem Kreis ist ein Quadrat.

Ein Dreieck ist in einem Kreis.

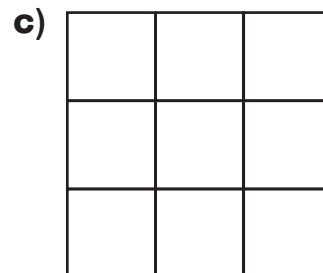
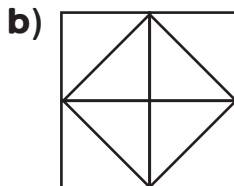
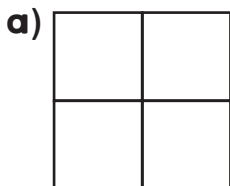


Geometrie 4

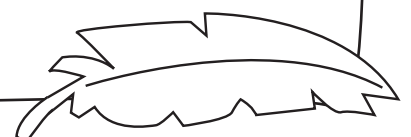
Wie viele Dreiecke siehst du? 



Wie viele Quadrate siehst du?



*Kleine und große!
So ergeben 4 kleine Quadrate ein großes.*

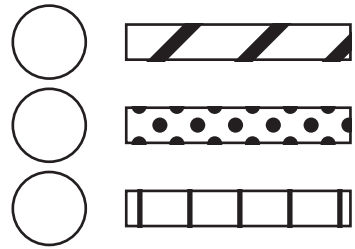
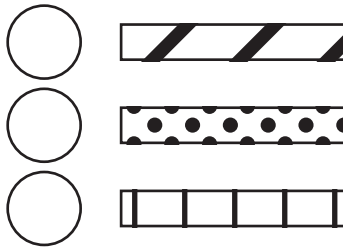
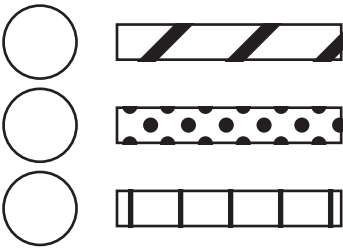
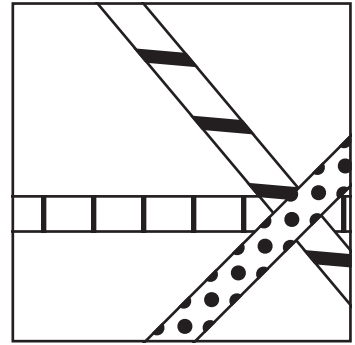
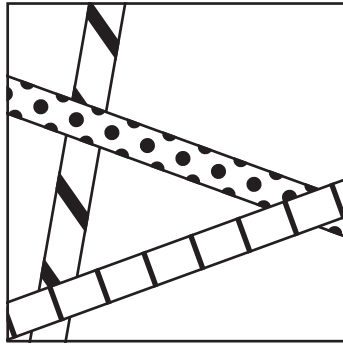





Allerlei 1

Wie liegen die Strohhalme?

 **Schreibe auf:** ① unten, ② Mitte, ③ oben.



Allerlei 2

 **Verbinde die Ausschnitte mit dem richtigen Bild**

